


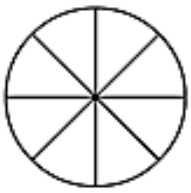

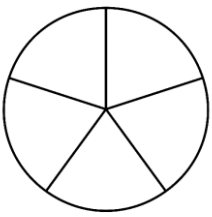

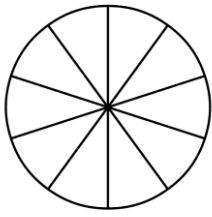


Συμπληρώνω τον πίνακα.

Δύο τρίτα		
Κυκλώνω	Χρωματίζω	Γράφω το κλάσμα
		_____
Τέσσερα όγδοα		
Κυκλώνω	Χρωματίζω	Γράφω το κλάσμα
		_____
Τρία πέμπτα		
Κυκλώνω	Χρωματίζω	Γράφω το κλάσμα
		_____
Εφτά δέκατα		
Κυκλώνω	Χρωματίζω	Γράφω το κλάσμα
		_____

**4. Κάνω ισοδύναμα κλάσματα**

$$\frac{1}{4} = \frac{\quad}{\quad} = \frac{\quad}{\quad} = \frac{\quad}{\quad} = \frac{\quad}{\quad} = \frac{\quad}{\quad} = \frac{\quad}{\quad}$$

$$\frac{2}{3} = \frac{\quad}{\quad} = \frac{\quad}{\quad} = \frac{\quad}{\quad} = \frac{\quad}{\quad} = \frac{\quad}{\quad} = \frac{\quad}{\quad}$$